







一〇九學年度第二學期數學第二冊第五單元評量試題

國小 _____ 年 _____ 班 _____ 座號 _____ 姓名 _____



一、將圖形連到正確的名稱：每答4分，共12分



(1)   正三角形



(2)   長方形

(3)   正方形



二、左邊的圖形是從哪裡剪下來的？連連看：每答4分，共12分

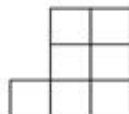

(1)   圓

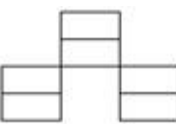

(2)   正方形

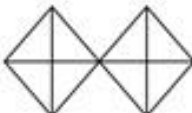

(3)   三角形

三、下面的圖形，各是用幾塊拼成的？填填看：每題6分，共24分


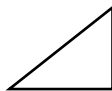


(1)  (16) 塊 




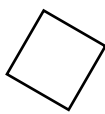
(2)  (7) 塊 





(3)  (6) 塊 


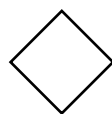


(4)  (8) 塊 

四、哪一張圖卡與左邊的圖形相同？在()裡打 \checkmark ：每題7分，共28分

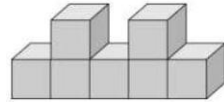
(1)    
 () () (\checkmark)

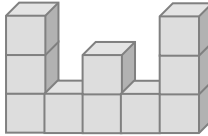
(2)    
 () (\checkmark) ()

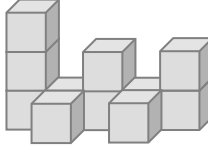
(3)    
 () (\checkmark) ()

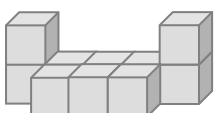
(4)    
 (\checkmark) () ()

五、下面的形體各用了幾個小立方體排成的？數數看，填一填：每題6分，共24分

(1)  (7) 個

(2)  (10) 個

(3)  (11) 個

(4)  (10) 個